

Assignment 15

Date: Thursday, 14th May 2020

English-

Story-A Glass of Milk(English Reader Book) Read and do the given questions:

- ❖ Exercise A-Underline the adjectives in the sentences and circle the nouns they describe(page25)
- ❖ Exercise B-Read these sentences and underline the material nouns(page26)

Maths –

DATA HANDLING (Pictograph)

Watch the video twice.

<https://youtu.be/28PW1UWnjwg>

Q.1 Create a pictograph for the information given below.

The table given below shows numbers of cold drink bottle sold by a shopkeeper on a certain day.

Fanta	Slice	Coke	Limca	Sprite
15	25	20	5	20

Q. 2 Read the pictograph and answer the following question



Pictographs
WORKSHEET#1

The pictograph below shows the number of students present in class on each working day of the week.

Monday	
Tuesday	
Wednesday	
Thursday	
Friday	

Key: represents 5 children

Answer the following questions.

- 1) How many children were present on Monday? _____
- 2) On which day of the week maximum children were present?

- 3) On which day of the week least number of children were present?

- 4) How many more children were present on Thursday than Wednesday? _____
- 5) On which days of the week same numbers of children were present? _____



Hindi-

अभ्यास पत्र

विषय-संयुक्ताक्षर, चन्द्रबिन्दु व र के रूपों का यथा स्थान सार्थक प्रयोग की जानकारी रखना।

दिए गए निर्देशों का पालन करें।

*** कोई पाँच संयुक्ताक्षर शब्द लिखें व उनमें से किन्हीं दो पर वाक्य बनाएँ।**

(क) शब्द

१.अच्छा २ छत्ता ३.----- ४.----- ५. -----

(ख)वाक्य

१. छछ- राम एक अच्छा बच्चा है।

२. -----

***कोई पाँच चन्द्रबिन्दु शब्द लिखें व उनमें से किन्हीं दो पर वाक्य बनाएँ।**

(क) शब्द

१.बाँसुरी २----- ३. ----- ४ ----- ५. -----

(ख) वाक्य

१. मेरे पास दो बाँसुरी हैं।

२. -----

***र के विभिन्न रूपों वाले कोई पाँच शब्द लिखें व उनमें से किन्हीं दो पर वाक्य बनाएँ।**

(क) शब्द

१.चक्र २.कार्य ३.ट्रक

४. -----

५. -----

(ख) वाक्य

१.हमें अपने सभी कार्य समय पर करने चाहिये।


२. -----

Watch the video and complete the worksheet.

<https://www.youtube.com/watch?v=zRmIKYvWRPU>

नीचे लिखे वाक्यों में संज्ञा के नीचे रेखा खींचो -

1 क. यह मेरा घर है।
ख. रमेश अच्छा लड़का है।
ग. वहाँ एक गाय खड़ी है।
घ. ताजमहल आगरा में है।
ङ. दिल्ली भारत की राजधानी है।
च. वह अंकित की घड़ी है।




5. नीचे कुछ शब्द दिए गए हैं। इनमें जो संज्ञा हैं, उनके आगे संज्ञा लिखो -

लड़का नदी
ऊपर चम्मच
वह तुम
घड़ा कमल
सूरज जाना


2

6. नीचे दिए गए चित्रों में रंग भरओ और इनके नाम लिखो -


3




.....



.....



.....



.....

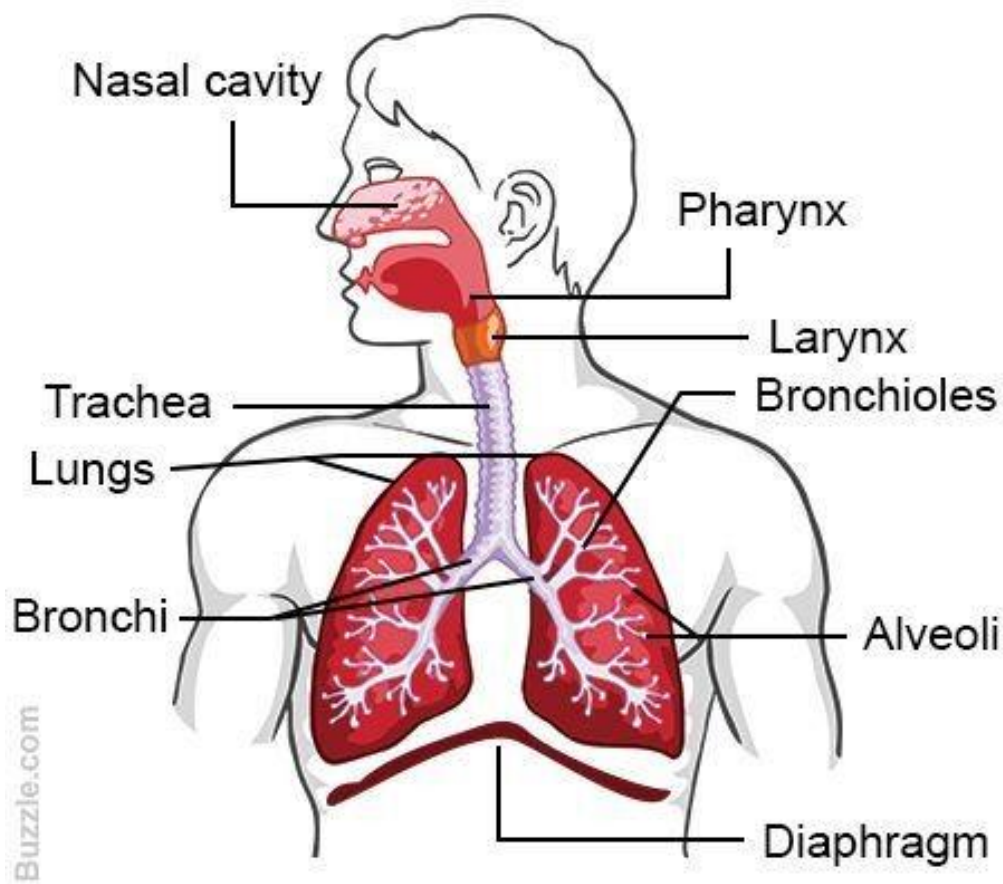
UOI -

The Human Respiratory System

The respiratory system is the group of tissues and organs in our body that allow us to breathe.

Watch the video carefully and read the following text.

<https://www.youtube.com/watch?v=ydX8Lw4q2Mk&feature=ytoutu.be>



The **respiratory system** is the set of organs that allows a person to breathe and exchange oxygen and carbon dioxide throughout the body. Human respiratory system consists of **nose, nasal passages, larynx, trachea, bronchial tubes and lungs**. We take in oxygen from the air through our **nose**. It then reaches the **lungs** through the **wind pipe**. The **hair in the nostrils** prevent dust and germs from entering our body.

The main organs in our respiratory system are our **lungs**. Our lungs are, in their simplest form, nothing more than sacs. As we breathe in, we fill these sacs with fresh oxygen-rich air. Our heart pumps blood into the walls of our lungs where it absorbs oxygen and releases carbon dioxide. As we exhale, or breathe out, we release the carbon dioxide-rich air into the space around us. With each breath we take, we are taking oxygen in, and putting carbon dioxide out.

The **pharynx** is part of the **digestive system** as well as the **respiratory system** because it carries both food and air. At the bottom of the **pharynx**, this pathway divides in two, one for food — the **esophagus**, which leads to the stomach and the other for air.

The **larynx**, commonly called the voice box, is an organ in the top of the neck involved in breathing, producing sound and protecting the trachea against food aspiration.

Task - After watching the video and reading the text answer the following questions. (Think-Puzzle –Explore)

- Which gas we inhale?
- Which gas we exhale?

Draw and label any four respiratory organs.

Write functions of any two respiratory organs.

- Anything about respiratory system that puzzles you.

- How to keep your respiratory system well/healthy.

Through the task

Skills I developed-----

Art-

<https://youtu.be/L6z7x0v-d04>

The Third element of art is colour.

Task :Watch the video carefully and Learn about the Primary colors.

Make one article/object of each color.

For example : Red color = Apple.

P.E-

<https://youtu.be/AepsRrYfqWU>

Watch the video and follow the steps to keep fit.

Dance-

<https://youtu.be/Lldp-gbdu1g>

Watch the video and follow the steps.